







# RAČUNSKE OPERACIJE S


## ŠTEVILI DO 20

1. SEŠTEJ ŠTEVILO PIK NA KOCAH IN REZULTAT ZAPIŠI NA KONEC RAČUNA.


 $+$  $=$

 $+$  $=$

 $+$  $=$



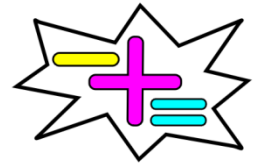
2. DEDEK JE KUPIL



KOLIKO HRUŠK MU JE OSTALO, ČE JE BABICA POJEDLA

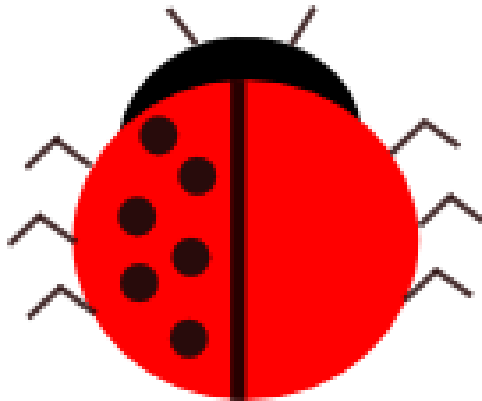


? NAPIŠI RAČUN, NAJPREJ S HRUŠKAMI, NATO S ŠTEVILKAMI.

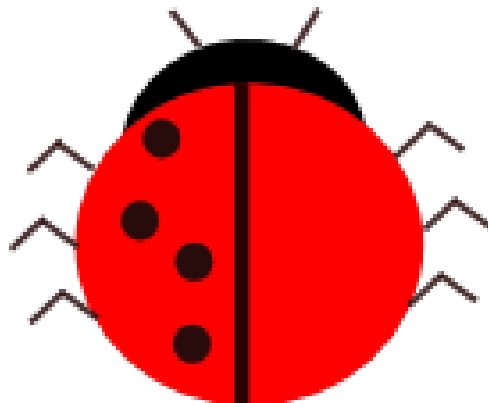



3. PIKAPOLONICA JE NA ENI STRANI IZGUBILA PIKE. NAJPREJ REŠI RAČUN IN NATO NARIŠI TOLIKO PIK NA PRAZNO STRAN, KOT JIH MANJKA.

A)  $6 + \underline{\quad} = 14$

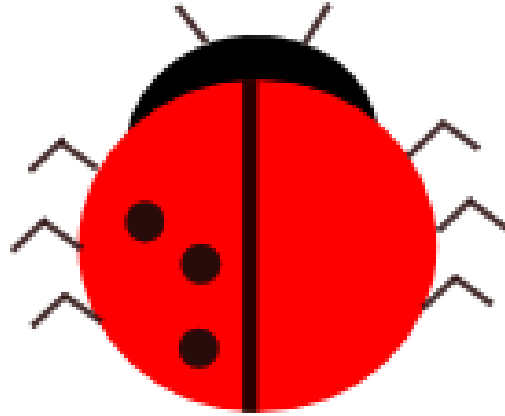


B)  $4 + \underline{\quad} = 11$

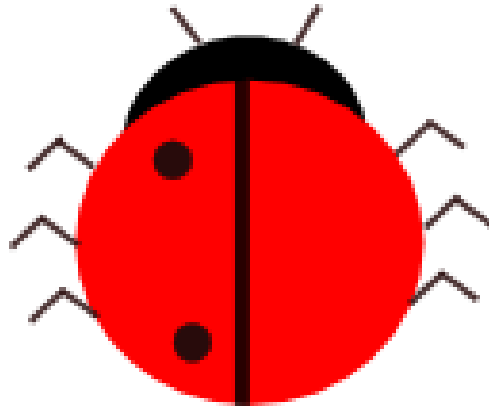


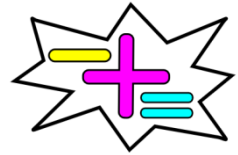


C)  $3 + \underline{\quad} = 7$



D)  $2 + \underline{\quad} = 9$





E)  $9 + \underline{\quad} = 16$

