



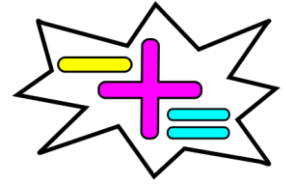


RAČUNSKE OPERACIJE S ŠTEVILI DO 20

1) NARIŠI TOLIKO PREDMETOV, DA BO PRAV.

	<input data-bbox="529 716 630 896" type="text" value="+"/>		<input data-bbox="973 757 1077 862" type="text" value="="/>	
---	--	---	---	--

	<input data-bbox="510 1456 646 1646" type="text" value="-"/>		<input data-bbox="949 1496 1077 1601" type="text" value="="/>	
---	--	---	---	--



2) IZRAČUNAJ IN POGLEJ, ČE SE REZULTATI RAZLIKUJEJO.

$$\text{3 bananas} + \text{2 bananas} = \underline{\hspace{2cm}}$$


$$\text{2 bananas} + \text{3 bananas} = \underline{\hspace{2cm}}$$

$$\text{3 strawberries} + \text{1 strawberry} = \underline{\hspace{2cm}}$$

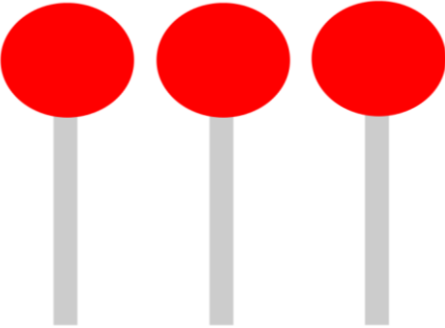

$$\text{1 strawberry} + \text{3 strawberries} = \underline{\hspace{2cm}}$$

$$\text{2 pushpins} + \text{3 pushpins} = \underline{\hspace{2cm}}$$

$$\text{3 pushpins} + \text{2 pushpins} = \underline{\hspace{2cm}}$$



3) MARKO IMA 3 RDEČE LIZIKE. IVO MU DARUJE 4 ZELENE LIZIKE. KOLIKO LIZIK IMA MARKO?

MARKO	IVO
	

ODGOVORI :